

2 DIMENSIONAL OBJECTS

DIGITAL TASK CARDS


GOOGLE
VERSION

AN EASY TO USE
DIGITAL
ACTIVITY!

Grades 3-5
By: Shelly Rees


24 2-Dimensional Shape Classification Problems (One Per Slide)

5 What is one way this object is NOT classified?



- a. quadrilateral
- b. rhombus
- c. parallelogram
- d. trapezoid


12 What type of triangle is this (one 90 degree (right) angle)?



14 What is the correct way to classify this triangle?


- a. isosceles, right
- b. isosceles, acute
- c. scalene, acute

19 This object is classified as a:



- a. quadrilateral
- b. hexagon
- c. pentagon
- d. triangle

23 This object is classified as a(n)



- a. octagon
- b. hexagon
- c. quadrilateral
- d. pentagon

Easy-to-Follow Guide for Use on Google Drive, Answer Sheet, and Answer Key

