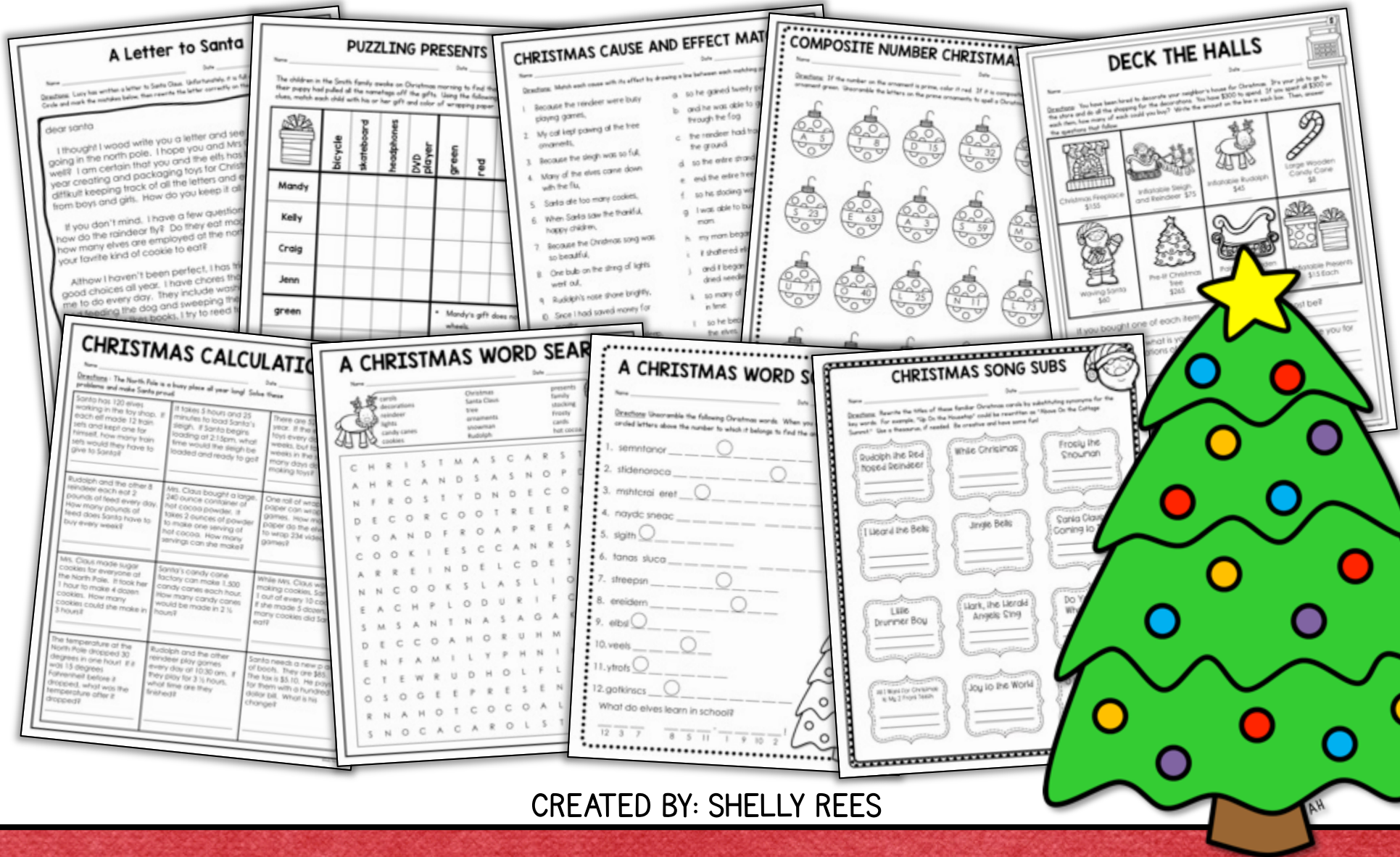


CHRISTMAS MATH & READING



CREATED BY: SHELLY REES

MATH PRINTABLES

PUZZLING PRESENTS

Name _____ Date _____

The children in the Smith family awoke on Christmas morning to find that their puppy had pulled all the names tags off the gifts. Using the following clues, match each child with his or her gift.

	bicycle	skateboard
Mandy		
Kelly		
Craig		
Jenn		
green		
red		
striped		
polka-dotted		

COMPOSITE NUMBER CHRISTMAS

Name _____ Date _____

Directions: If the number on the ornament is prime, color it red. If it is composite, color it green. Unscramble the letters on the prime ornaments to spell a Christmas word.

A 5	T 8	D 15	L 32	A 17
S 23	E 63	A 3	S 59	M 37
U 71		L 25	N 11	L 73
T 47	R 28	C 31	B 18	G 10

DECK THE HALLS

Name _____ Date _____

Directions: You have been hired to decorate your neighbor's house for Christmas. You have \$300 to spend on decorations. Write the amount on each item, how many of each could you buy? Write the amount on the questions that follow.

Christmas Fireplace \$155	Inflatable Sleigh and Reindeer \$75
Waving Santa \$60	Pre-lit Christmas Tree \$265

If you bought one of each item, how much more money would you need?

If there is no tax, what is your change?

Name 3 combinations of bills and coins that equal your change.

1. _____
2. _____
3. _____

Would you be able to buy 10 and 4 candy canes with \$200? If not, how much more money would you need?

CHRISTMAS CALCULATIONS

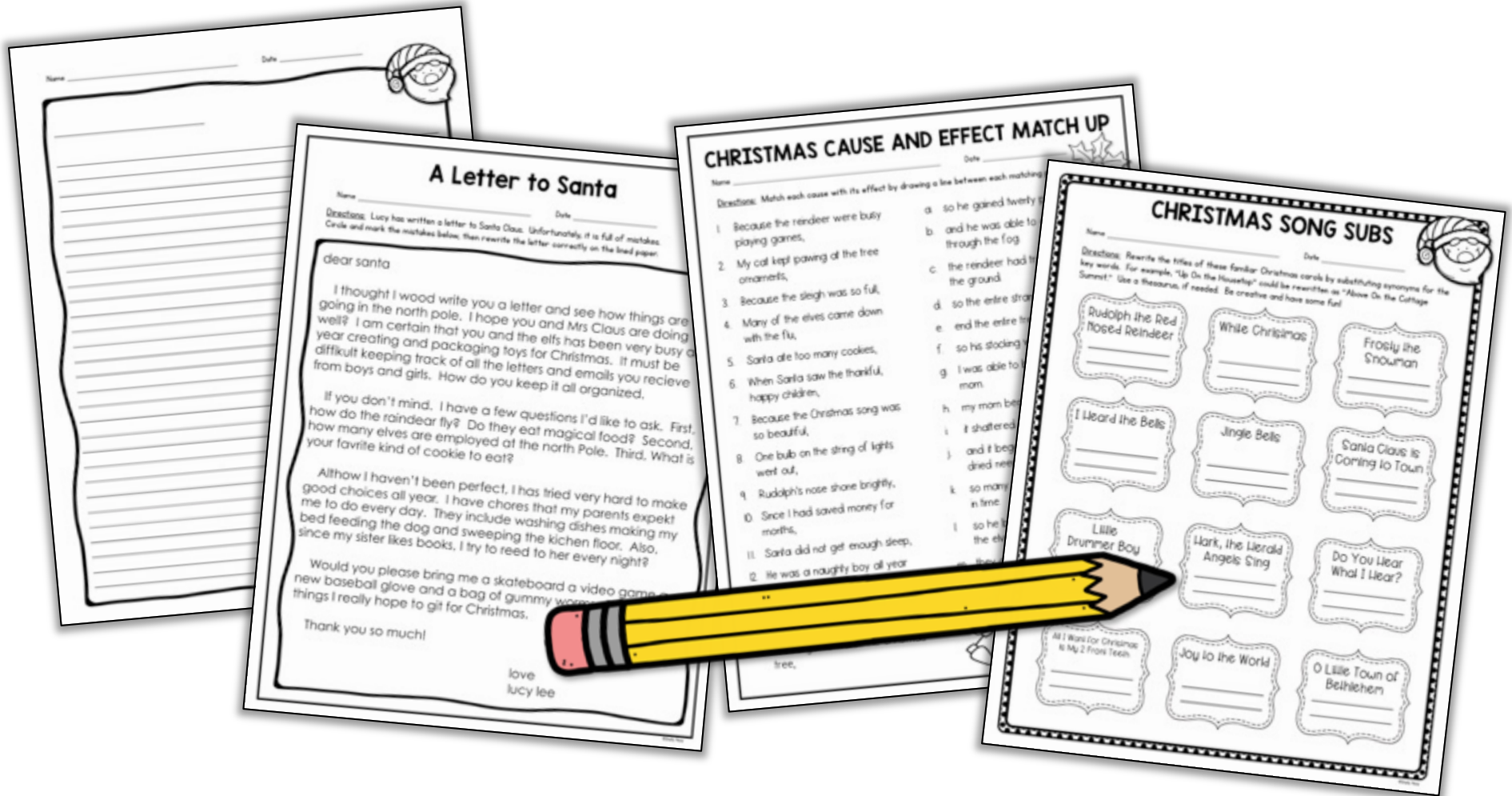
Name _____ Date _____

Directions: The North Pole is a busy place all year long! Solve these problems and make Santa proud.

Santa has 120 elves working in the toy shop. If each elf made 12 train sets and kept one for himself, how many train sets would they have to give to Santa?	It takes 5 hours and 25 minutes to load Santa's sleigh. If Santa begins loading at 2:15pm, what time would the sleigh be loaded and ready to go?	There are 52 weeks in one year. If the elves make toys every day of those weeks, but take off 3 weeks in the summer, how many days do they spend making toys?
Rudolph and the other 8 reindeer each eat 2 pounds of feed every day. How many pounds of feed does Santa have to buy every week?	Mrs. Claus bought a large, 240 ounce container of hot cocoa powder. It takes 2 ounces of powder to make one serving of hot cocoa. How many servings can she make?	One roll of wrapping paper can wrap 24 video games. How many rolls of paper do the elves need to wrap 234 video games?
Mrs. Claus made sugar cookies for everyone at the North Pole. It took her 1 hour to make 4 dozen cookies. How long would it take her to make 3 dozen cookies?	Santa's candy cane factory can make 1,500 candy canes each hour. How many candy canes would be made in 2 1/2 hours?	While Mrs. Claus was making cookies, Santa ate 1 out of every 10 cookies. If she made 5 dozen, how many cookies did Santa eat?
The temperature at the North Pole dropped 30 degrees in one hour! If it was 15 degrees Fahrenheit before it dropped, what was the temperature after it dropped?	Every day, the elves play for 1 hour. What time are they finished?	Santa needs a new pair of shoes. They are \$85. How many days will it take him to save the money?

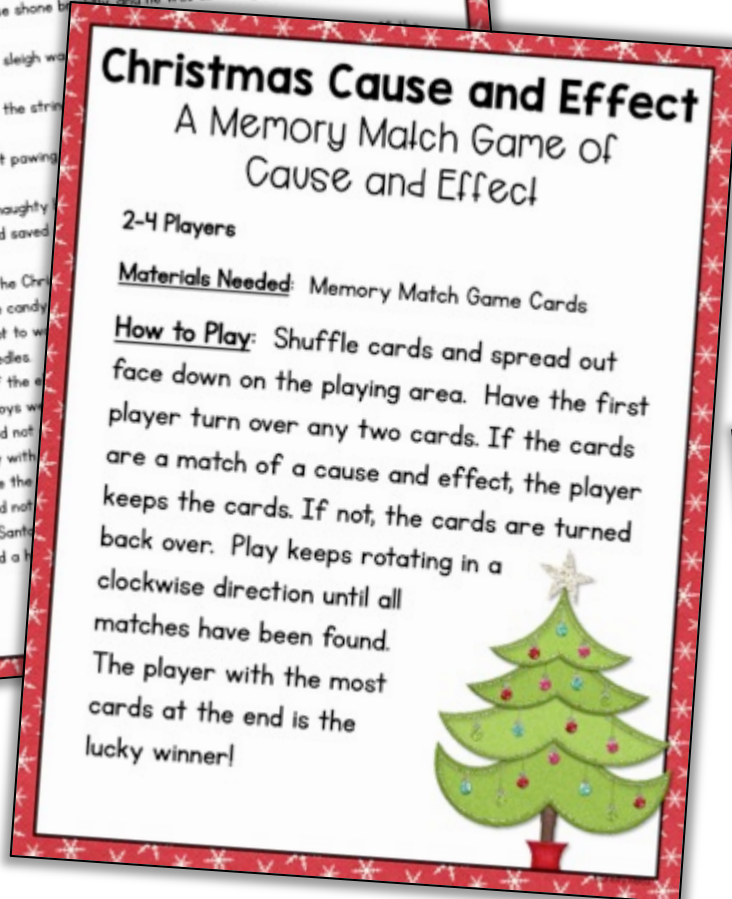
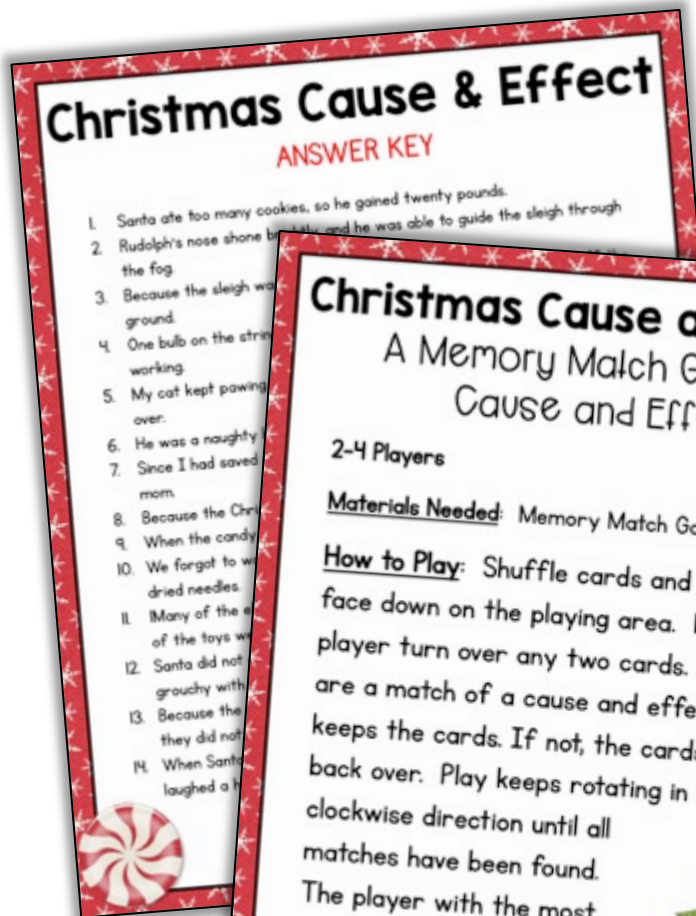
PRINT AND GO! NO PREP WORKSHEETS

READING PRINTABLES



PRINT AND GO! NO PREP WORKSHEETS

CAUSE & EFFECT GAME



One bulb on the string of lights went out,

so the entire strand stopped working.

Because the sleigh was so full,

the reindeer had trouble lifting it off the ground.

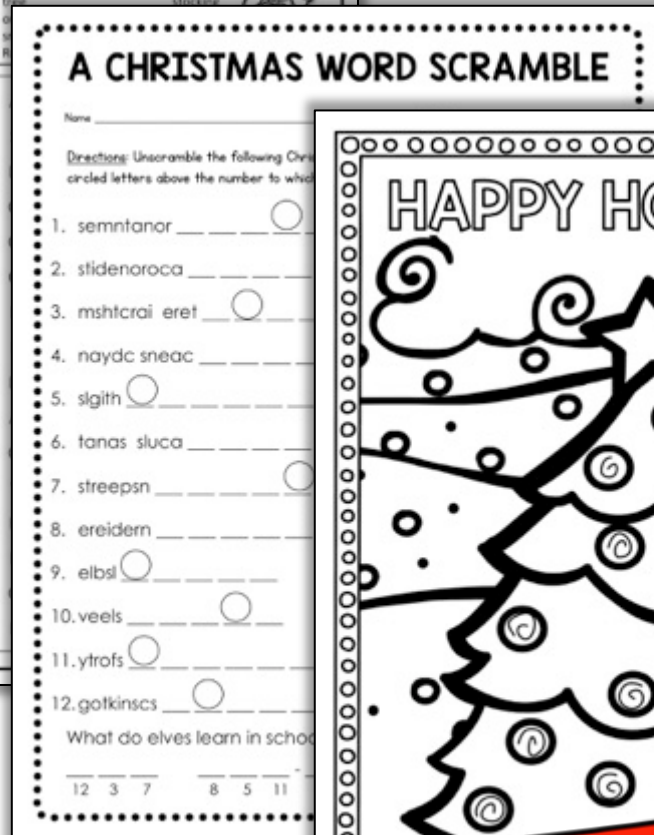
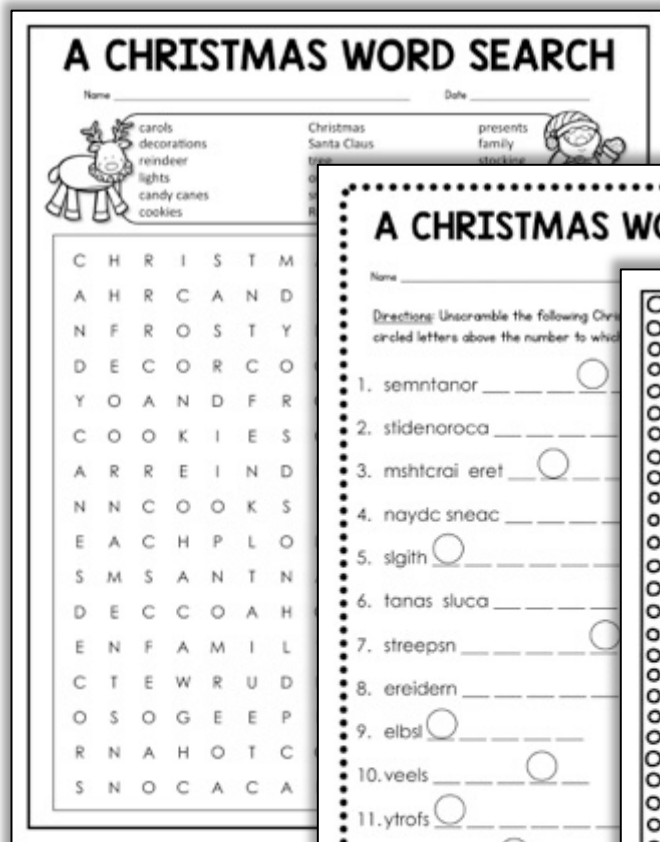
Santa ate too many cookies,

so he gained twenty pounds.



PERFECT FOR A CENTER ACTIVITY!

COLORING & FUN PAGES



NO PREP EXTRAS!