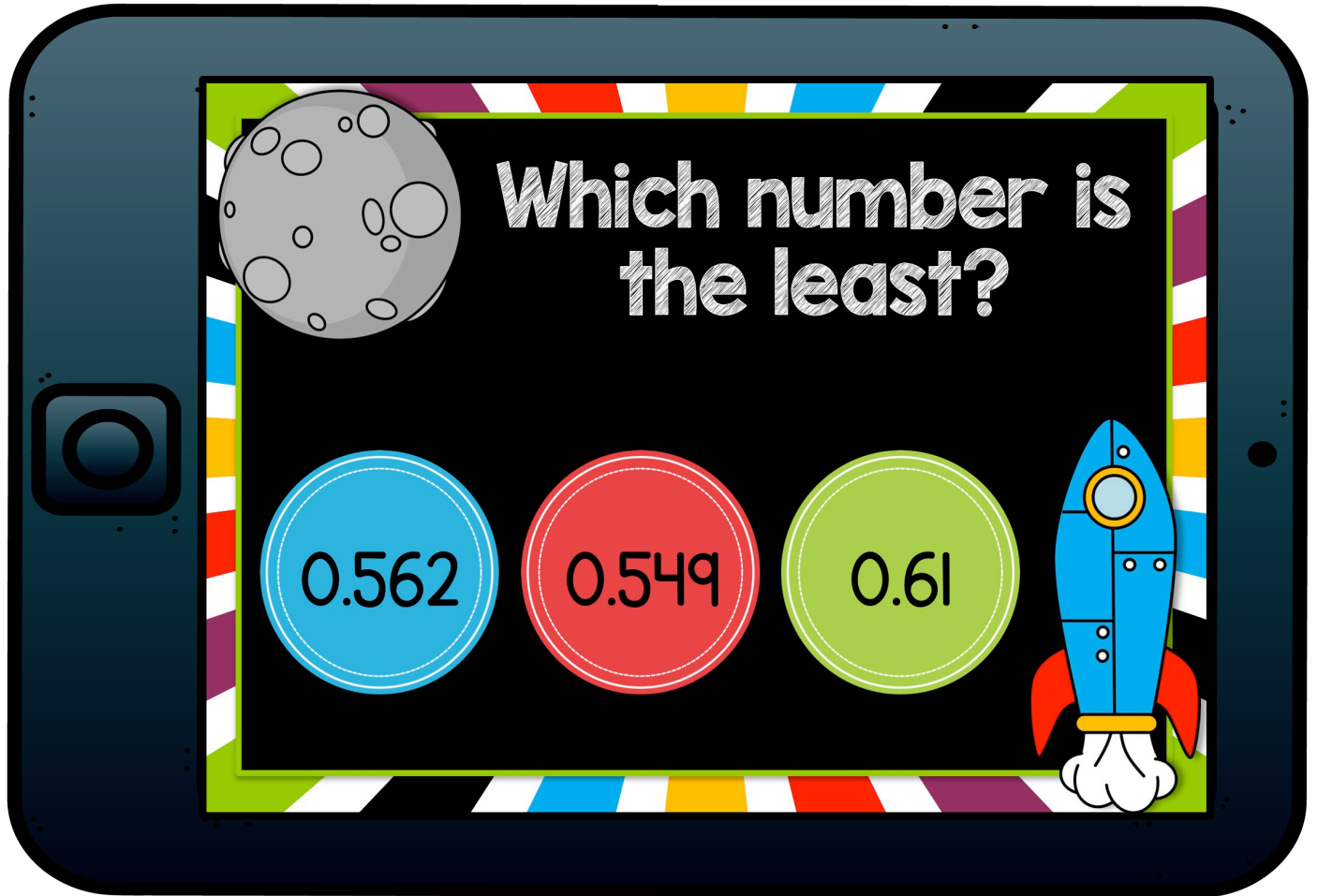



BOOM Cards



CREATED BY: Shelly Rees


DECIMAL COMPARISON

30 BOOM Cards




Which number is the greatest?

65.7 65.19 6.75




A Boom Card with a black background and a colorful striped border. It features an Earth icon in the top left corner. The question "Which number is the greatest?" is written in white. Below the question are three colored circles containing the numbers 65.7 (blue), 65.19 (red), and 6.75 (green). A blue rocket icon is in the bottom right corner.




Which number is the least?

6,740 674.5 674.29




A Boom Card with a black background and a colorful striped border. It features a Saturn icon in the top left corner. The question "Which number is the least?" is written in white. Below the question are three colored circles containing the numbers 6,740 (blue), 674.5 (red), and 674.29 (green). A blue rocket icon is in the bottom right corner.




Which number is the least?

4.89 4.299 421




A Boom Card with a black background and a colorful striped border. It features a Jupiter icon in the top left corner. The question "Which number is the least?" is written in white. Below the question are three colored circles containing the numbers 4.89 (blue), 4.299 (red), and 421 (green). A blue rocket icon is in the bottom right corner.



Which number is the greatest?

3,451.2 3,450.8 3,450.29



A Boom Card with a black background and a colorful striped border. It features a Saturn icon in the top left corner. The question "Which number is the greatest?" is written in white. Below the question are three colored circles containing the numbers 3,451.2 (blue), 3,450.8 (red), and 3,450.29 (green). A blue rocket icon is in the bottom right corner.

Click Here to
Try it Out! 